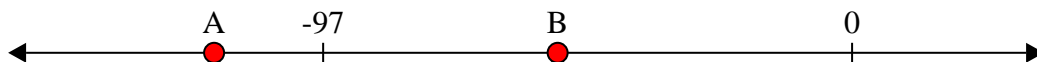




Solve each problem.


Answers

- 1) Which letter best shows -54?



1. \_\_\_\_\_

- 2) Which letter best shows -98?



2. \_\_\_\_\_

- 3) Which letter best shows -97?



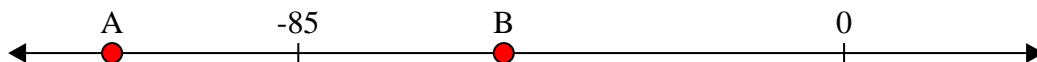
3. \_\_\_\_\_

- 4) Which letter best shows -60?




4. \_\_\_\_\_

- 5) Which letter best shows -114?



5. \_\_\_\_\_

- 6) Which letter best shows -107?




6. \_\_\_\_\_

- 7) Which letter best shows -121?




7. \_\_\_\_\_

- 8) Which letter best shows -39?




8. \_\_\_\_\_

- 9) Which letter best shows -32?



9. \_\_\_\_\_

- 10) Which letter best shows -39?

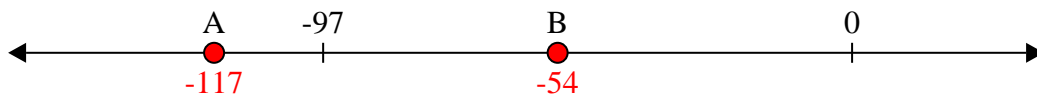


10. \_\_\_\_\_




Solve each problem.


- 1) Which letter best shows -54?



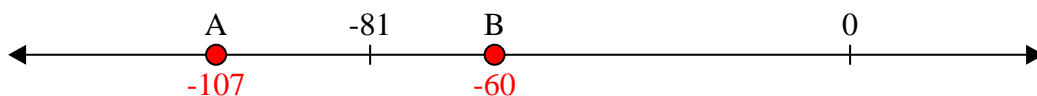
- 2) Which letter best shows -98?



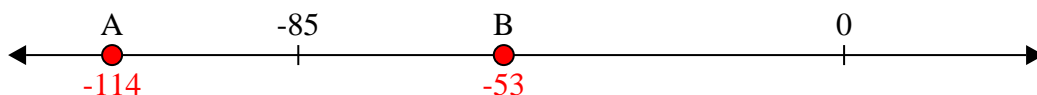
- 3) Which letter best shows -97?




- 4) Which letter best shows -60?




- 5) Which letter best shows -114?



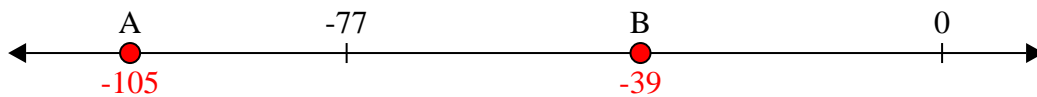
- 6) Which letter best shows -107?




- 7) Which letter best shows -121?



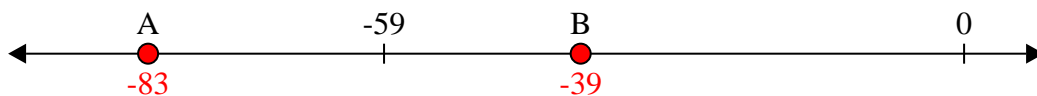
- 8) Which letter best shows -39?



- 9) Which letter best shows -32?



- 10) Which letter best shows -39?

**Answers**

1. **B**
2. **A**
3. **A**
4. **B**
5. **A**
6. **A**
7. **A**
8. **B**
9. **B**
10. **B**